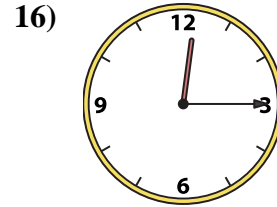
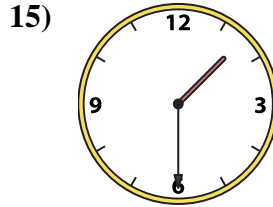
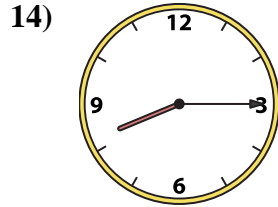
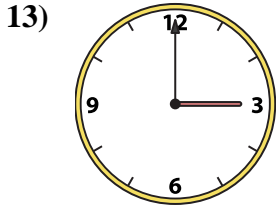
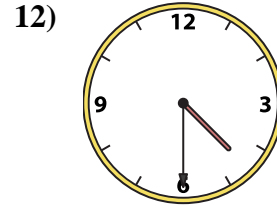
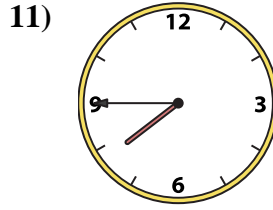
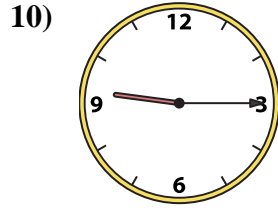
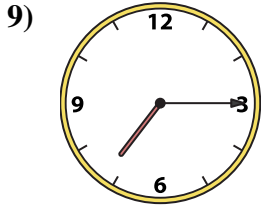
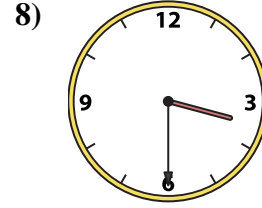
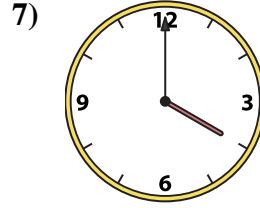
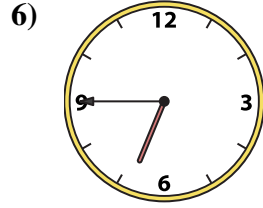
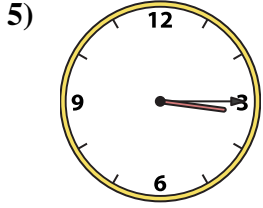
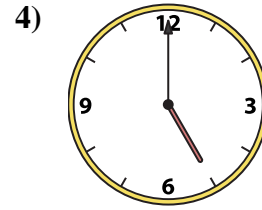
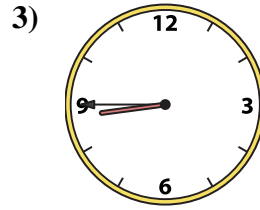
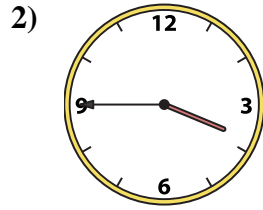
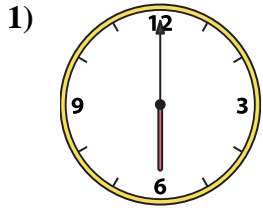




Match the analog clock to the digital clock.

Answers



A. **5:00**

B. **8:45**

C. **3:15**

D. **3:30**

E. **3:00**

F. **7:45**

G. **12:15**

H. **1:30**

I. **3:45**

J. **6:45**

K. **4:00**

L. **7:15**

M. **8:15**

N. **9:15**

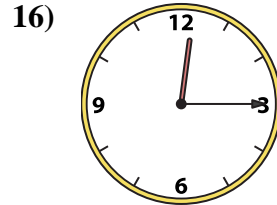
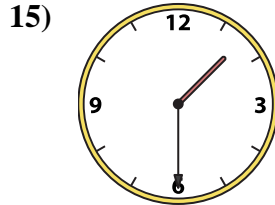
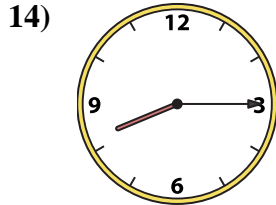
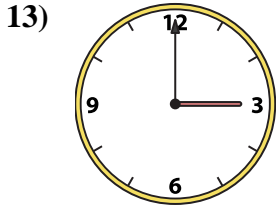
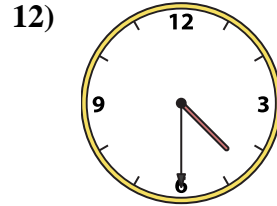
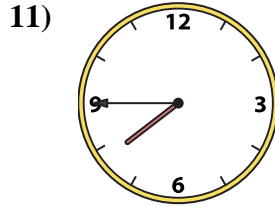
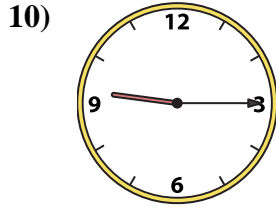
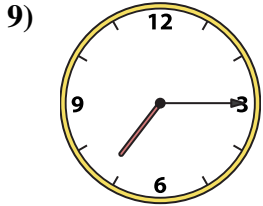
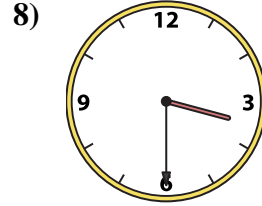

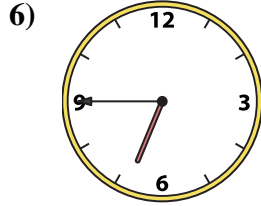
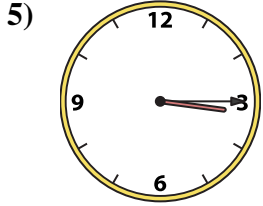
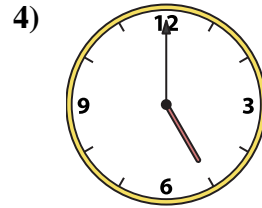
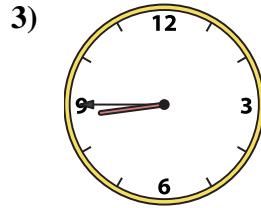
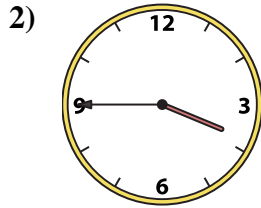
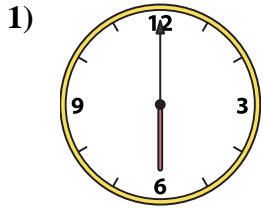
O. **6:00**

P. **4:30**

1. _____
2. _____
3. _____
4. _____
5. _____
6. _____
7. _____
8. _____
9. _____
10. _____
11. _____
12. _____
13. _____
14. _____
15. _____
16. _____



Match the analog clock to the digital clock.



A. **5:00**

B. **8:45**

C. **3:15**

D. **3:30**

E. **3:00**

F. **7:45**

G. **12:15**

H. **1:30**

I. **3:45**

J. **6:45**

K. **4:00**

L. **7:15**

M. **8:15**

N. **9:15**

O. **6:00**

P. **4:30**

Answers

1. **O**

2. **I**

3. **B**

4. **A**

5. **C**

6. **J**

7. **K**

8. **D**

9. **L**

10. **N**

11. **F**

12. **P**

13. **E**

14. **M**

15. **H**

16. **G**